




すうじあて筆算③

名前

※点線のワクの中にある数字のカードを、もとの問題になるようにあてはめます。

①




□	□	□
---	---	---

2 7 1

+ 2 5 5

□	□	□
---	---	---

②




2 5 6

□	6	□
---	---	---

+ 1 9 7

□	□	□	□
---	---	---	---

③



4 0 8 7

□	□	□	□
---	---	---	---

+ 2 5 6 9

□	□	□	□
---	---	---	---




すうじあて筆算③

名前

※点線のワクの中にある数字のカードを、もとの問題になるようにあてはめます。

①




1	8	4
---	---	---

2	7	1
---	---	---

+	2	5	5
---	---	---	---

7	1	0
---	---	---

②




2	5	6
---	---	---

7	6	5
---	---	---

+	1	9	7
---	---	---	---

1	2	1	8
---	---	---	---

③



4	0	8	7
---	---	---	---

1	6	3	0
---	---	---	---

+	2	5	6	9
---	---	---	---	---

8	2	8	6
---	---	---	---