




すうじあて筆算⑤

名前


※点線のワクの中にある数字のカードを、もとの問題になるようにあてはめます。

①




$$\begin{array}{r}
 \square \square \square \\
 - 285 \\
 \hline
 \square \square \square
 \end{array}$$

②



$$\begin{array}{r}
 \square \square \square \\
 - \square \square \square \\
 \hline
 407
 \end{array}$$

③




$$\begin{array}{r}
 \square \square \square \\
 - 258 \\
 \hline
 \square \square \square
 \end{array}$$



<h1 style="margin: 0;">すうじあて筆算⑤</h1>	名前	
--------------------------------------	----	--


※点線のワクの中にある数字のカードを、もとの問題になるようにあてはめます。

①




$$\begin{array}{r}
 \boxed{7} \boxed{0} \boxed{1} \\
 - 285 \\
 \hline
 \boxed{4} \boxed{1} \boxed{6}
 \end{array}$$

②



$$\begin{array}{r}
 \boxed{5} \boxed{8} \boxed{6} \\
 - \boxed{1} \boxed{7} \boxed{9} \\
 \hline
 407
 \end{array}$$

③



$$\begin{array}{r}
 \boxed{4} \boxed{0} \boxed{0} \\
 - 258 \\
 \hline
 \boxed{1} \boxed{4} \boxed{2}
 \end{array}$$